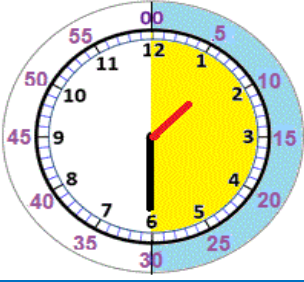


ZAMAN ÖLÇME













Yarım Saatler



Yelkovan 12'den, 6'nın üzerine gelene kadar **30 dakika** geçmiş olur. Bu süreye **yarım saat** denir. Yarım saati buçuk diye okuruz.

Yandaki saat 01.30 ya da bir buçuk diye okunur.

1. Aşağıdaki saatlerin kaçı gösterdiğini örnekteki gibi yazalım.

| | | | |
|--|--|---|--|
|  ☀️ 1.30 🌙 13.30 |  ☀️ <input type="text"/> 🌙 <input type="text"/> |  ☀️ <input type="text"/> 🌙 <input type="text"/> |  ☀️ <input type="text"/> 🌙 <input type="text"/> |
|  ☀️ <input type="text"/> 🌙 <input type="text"/> |  ☀️ <input type="text"/> 🌙 <input type="text"/> |  ☀️ <input type="text"/> 🌙 <input type="text"/> |  ☀️ <input type="text"/> 🌙 <input type="text"/> |
|  ☀️ <input type="text"/> 🌙 <input type="text"/> |  ☀️ <input type="text"/> 🌙 <input type="text"/> |  ☀️ <input type="text"/> 🌙 <input type="text"/> |  ☀️ <input type="text"/> 🌙 <input type="text"/> |

Açıklama: ☀️ Öğleden önce

🌙 Öğleden sonra

ZAMAN ÖLÇME

2. Belirtilen saatlerin akrep ve yelkovanlarını örnekteki gibi çizerek gösterelim.



Saat üç buçuk



Saat 01.30



Saat beş buçuk



Saat 17.30



Saat yedi buçuk




Saat 03.30



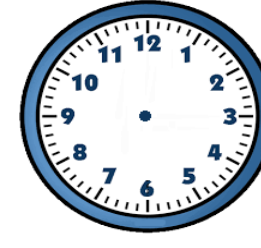
Saat dokuz buçuk




Saat 19.30




Saat on bir buçuk



Saat 05.30



Saat iki buçuk




Saat 21.30



Saat dört buçuk




Saat 07.30




Saat altı buçuk



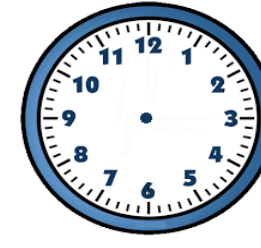
Saat 23.30




Saat sekiz buçuk



Saat 09.30



Saat on buçuk



Saat 02.30