

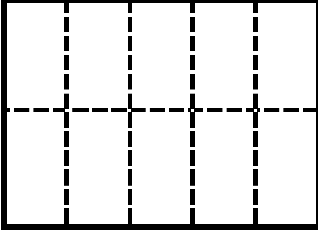
Adı:.....
Soyadı:.....

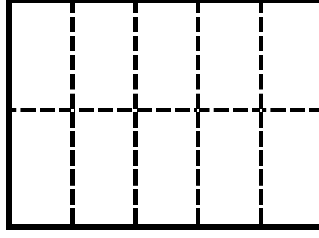
Sınıfı:.....
No:.....

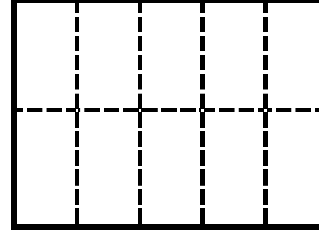
...../...../.....
.....

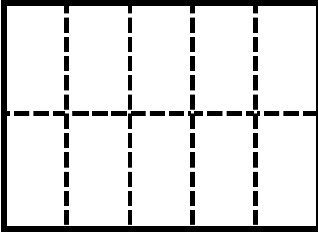
Paydası 10 Olan Kesirlerin Birim Kesrini Gösterelim

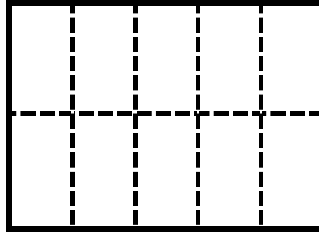
Verilen şekilleri kesir sayısına göre boyyalım. Şeklimizin birim kesrini yazalım.

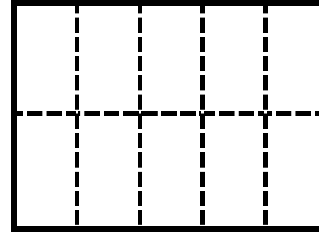
	
Kesir sayısı	Birim kesir
$\frac{4}{10}$	$\frac{\text{.....}}{\text{.....}}$

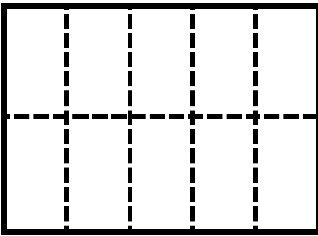
	
Kesir sayısı	Birim kesir
$\frac{7}{10}$	$\frac{\text{.....}}{\text{.....}}$

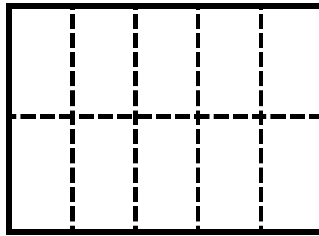
	
Kesir sayısı	Birim kesir
$\frac{2}{10}$	$\frac{\text{.....}}{\text{.....}}$

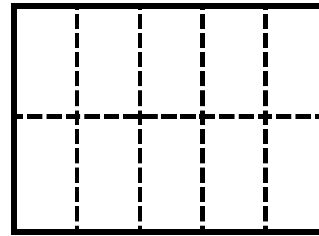
	
Kesir sayısı	Birim kesir
$\frac{3}{10}$	$\frac{\text{.....}}{\text{.....}}$

	
Kesir sayısı	Birim kesir
$\frac{8}{10}$	$\frac{\text{.....}}{\text{.....}}$

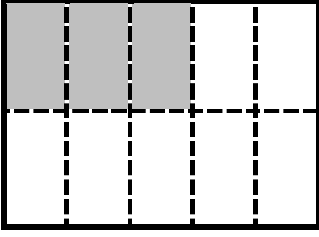
	
Kesir sayısı	Birim kesir
$\frac{5}{10}$	$\frac{\text{.....}}{\text{.....}}$

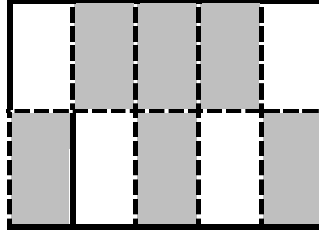
	
Kesir sayısı	Birim kesir
$\frac{9}{10}$	$\frac{\text{.....}}{\text{.....}}$

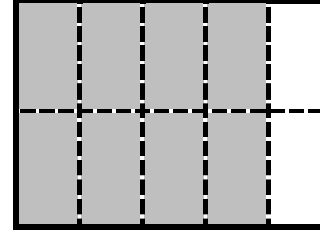
	
Kesir sayısı	Birim kesir
$\frac{6}{10}$	$\frac{\text{.....}}{\text{.....}}$

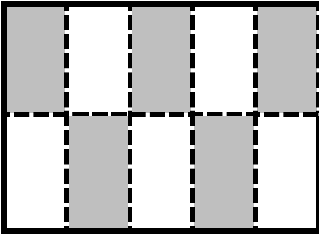
	
Kesir sayısı	Birim kesir
$\frac{10}{10}$	$\frac{\text{.....}}{\text{.....}}$

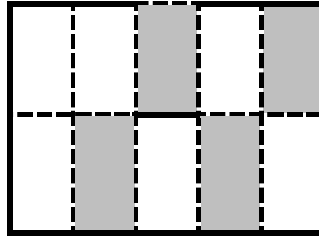
Verilen şekillere göre kesir sayılarını yazalım. Şeklimizin birim kesrini yazalım.

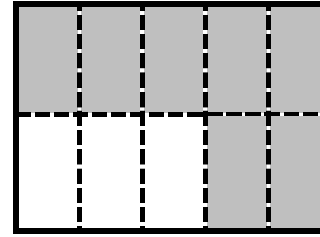
	
Kesir sayısı	Birim kesir
<u> </u>	<u> </u>
.....

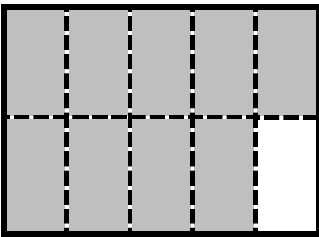
	
Kesir sayısı	Birim kesir
<u> </u>	<u> </u>
.....

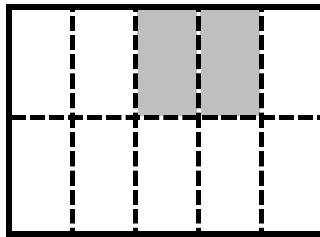
	
Kesir sayısı	Birim kesir
<u> </u>	<u> </u>
.....

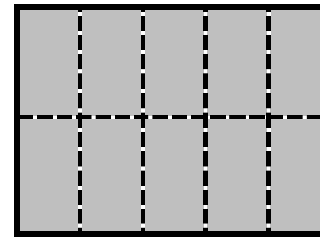
	
Kesir sayısı	Birim kesir
<u> </u>	<u> </u>
.....

	
Kesir sayısı	Birim kesir
<u> </u>	<u> </u>
.....

	
Kesir sayısı	Birim kesir
<u> </u>	<u> </u>
.....

	
Kesir sayısı	Birim kesir
<u> </u>	<u> </u>
.....

	
Kesir sayısı	Birim kesir
<u> </u>	<u> </u>
.....

	
Kesir sayısı	Birim kesir
<u> </u>	<u> </u>
.....