

ADI SOYADI:

Toplama işlemlerini yapalım.

$$\begin{array}{r} 313 \\ +400 \\ \hline \end{array} \quad \begin{array}{r} 567 \\ +345 \\ \hline \end{array} \quad \begin{array}{r} 212 \\ +134 \\ \hline \end{array} \quad \begin{array}{r} 780 \\ +220 \\ \hline \end{array}$$

$$\begin{array}{r} 413 \\ +500 \\ \hline \end{array} \quad \begin{array}{r} 600 \\ +300 \\ \hline \end{array} \quad \begin{array}{r} 400 \\ +225 \\ \hline \end{array} \quad \begin{array}{r} 176 \\ +218 \\ \hline \end{array}$$

$$\begin{array}{r} 500 \\ +500 \\ \hline \end{array} \quad \begin{array}{r} 420 \\ +518 \\ \hline \end{array} \quad \begin{array}{r} 333 \\ +222 \\ \hline \end{array} \quad \begin{array}{r} 456 \\ +321 \\ \hline \end{array}$$

$$\begin{array}{r} 432 \\ +334 \\ \hline \end{array} \quad \begin{array}{r} 529 \\ +445 \\ \hline \end{array} \quad \begin{array}{r} 790 \\ +222 \\ \hline \end{array} \quad \begin{array}{r} 956 \\ +44 \\ \hline \end{array}$$

Tablolu toplama işlemlerini yapalım.

+	410	333	145	100
234				
123				
502				

MINİ TEST

Aşağıdakilerden hangisinin sonucu doğrudur?

A) $317 + 140 = 557$

B) $538 + 261 = 799$

C) $712 + 120 = 921$

	Toplamaya yüzler basamağından başlanır.
	Parantez içindeki toplama önce yapılır.
	Üçlü toplama işleminde elde 2 olabilir.

Yukarıdaki ifadelere doğruysa "D" harfi, yanlışsa "Y" harfi yazıldığında ,hangi seçenekteki sıralamaya ulaşırsınız?

A) DYD

B) DDY

C) YDD

II VII I

Yukarıdaki Romen rakamlarını kullanarak yazılabilecek en büyük ve en küçük üç basamaklı sayının toplamı kaçtır?

A) 848

B) 888

C) 884

$$(129 + 192) + 34 = (34 + 129) + \triangle$$

$$180 + (184 + 67) = (67 + 180) + \diamond$$

Yukarıdaki eşitliklere göre $\triangle + \diamond$ toplamı kaçtır?

A) 172

B) 272

C) 276

Eldesiz toplama işlemlerini yapalım.

3.SINIF MATEMATİK 8

$$\begin{array}{r} 242 \\ + 136 \\ \hline \end{array}$$

$$\begin{array}{r} 172 \\ + 603 \\ \hline \end{array}$$

$$\begin{array}{r} 311 \\ + 523 \\ \hline \end{array}$$

$$\begin{array}{r} 337 \\ + 602 \\ \hline \end{array}$$

$$\begin{array}{r} 750 \\ + 222 \\ \hline \end{array}$$

$$\begin{array}{r} 787 \\ + 101 \\ \hline \end{array}$$

$$\begin{array}{r} 465 \\ + 304 \\ \hline \end{array}$$

$$\begin{array}{r} 580 \\ + 309 \\ \hline \end{array}$$

$$\begin{array}{r} 854 \\ + 105 \\ \hline \end{array}$$

$$\begin{array}{r} 473 \\ + 112 \\ \hline \end{array}$$

$$\begin{array}{r} 545 \\ + 353 \\ \hline \end{array}$$

$$\begin{array}{r} 371 \\ + 110 \\ \hline \end{array}$$

$$\begin{array}{r} 510 \\ + 315 \\ \hline \end{array}$$

$$\begin{array}{r} 865 \\ + 113 \\ \hline \end{array}$$

Toplama işlemlerini yapalım.

$$\begin{array}{r} 324 \\ + 271 \\ \hline \end{array}$$

$$\begin{array}{r} 117 \\ + 130 \\ \hline \end{array}$$

$$\begin{array}{r} 703 \\ + 202 \\ \hline \end{array}$$

$$\begin{array}{r} 434 \\ + 121 \\ \hline \end{array}$$

$$\begin{array}{r} 854 \\ + 130 \\ \hline \end{array}$$

$$\begin{array}{r} 674 \\ + 124 \\ \hline \end{array}$$

$$\begin{array}{r} 532 \\ + 312 \\ \hline \end{array}$$

$$\begin{array}{r} 254 \\ + 120 \\ \hline \end{array}$$

$$\begin{array}{r} 280 \\ + 408 \\ \hline \end{array}$$

$$\begin{array}{r} 151 \\ + 313 \\ \hline \end{array}$$

Üçlü toplama işlemlerini yapalım.

$$\begin{array}{r} 170 \\ 182 \\ + 134 \\ \hline \end{array}$$

$$\begin{array}{r} 383 \\ 230 \\ + 179 \\ \hline \end{array}$$

$$\begin{array}{r} 614 \\ 131 \\ + 134 \\ \hline \end{array}$$

$$\begin{array}{r} 263 \\ 182 \\ + 173 \\ \hline \end{array}$$

$$\begin{array}{r} 125 \\ 639 \\ + 159 \\ \hline \end{array}$$

$$\begin{array}{r} 188 \\ 515 \\ + 370 \\ \hline \end{array}$$

$$\begin{array}{r} 216 \\ 208 \\ + 493 \\ \hline \end{array}$$

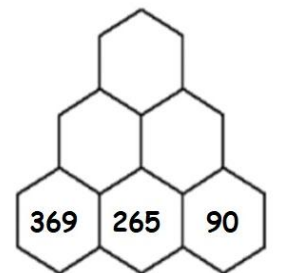
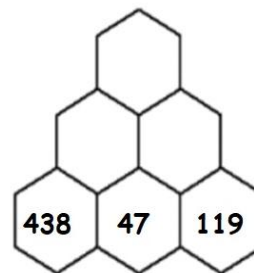
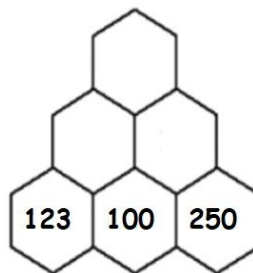
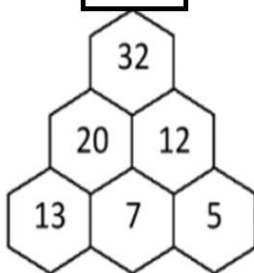
$$\begin{array}{r} 162 \\ 183 \\ + 780 \\ \hline \end{array}$$

$$\begin{array}{r} 424 \\ 338 \\ + 171 \\ \hline \end{array}$$

$$\begin{array}{r} 150 \\ 122 \\ + 762 \\ \hline \end{array}$$

Örneğe göre toplama işlemlerini yapalım.

örnek



Prantezli toplama işlemlerini yapalım.

$$(88+32)+12=$$

$$(19+57)+95=$$

$$36+(92+9)=$$

$$(54+59)+69=$$

$$(43+73)+79=$$

$$(14+99)+3=$$

$$42+(21+85)=$$

$$57+(90+40)=$$

$$89+(10+64)=$$

$$23+(66+53)=$$

$$94+(94+80)=$$

$$(35+16)+24=$$

$$19+(15+22)=$$

$$(42+88)+35=$$

$$(54+59)+69=$$

$$(53+69)+9=$$