

Adı:.....
Soyadı:.....

Sınıfı:.....

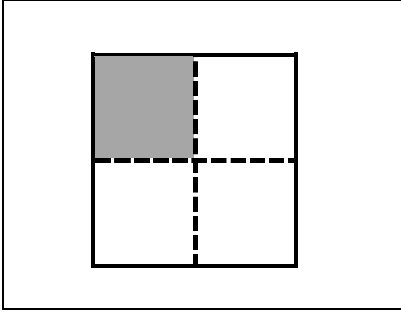
No:.....

...../...../.....

.....

KESİRLER-1

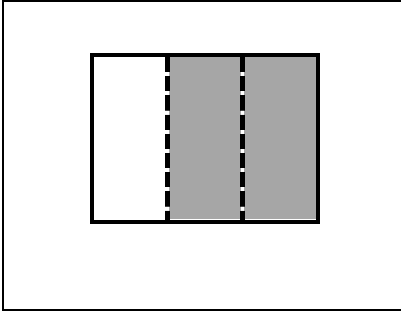
Aşağıdaki şekillerin model olduğu kesir sayılarını örnekteki gibi yazınız.



14... eş parçadan ...1... tanesi alınmış.

4 Bir bütün ...4... eş parçaya bölünmüş.

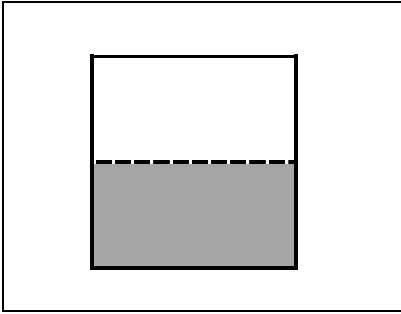
Okunuşu: Bir bölü dört veya dörtte bir.



.....

.....

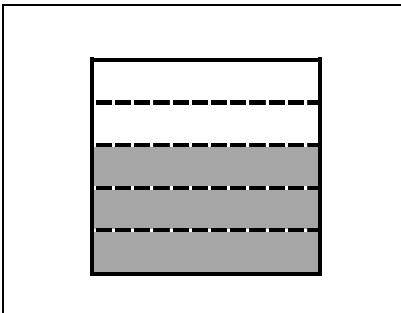
Okunuşu:.....



.....

.....

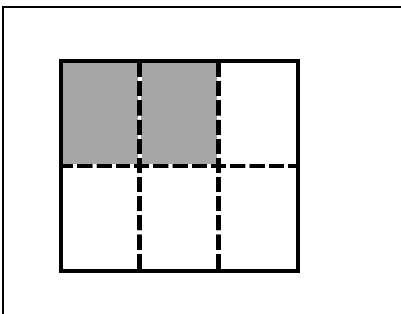
Okunuşu:.....



.....

.....

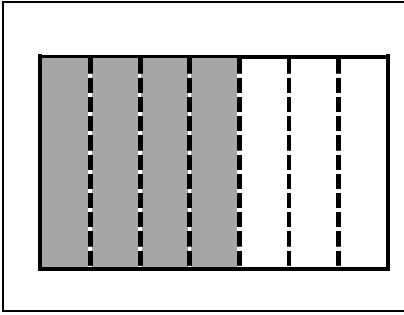
Okunuşu:.....



.....

.....

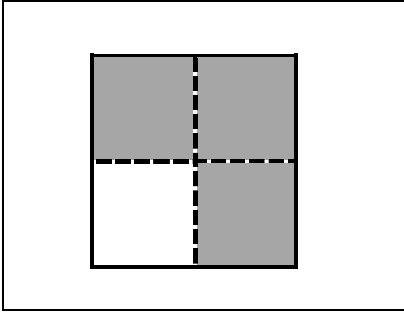
Okunuşu:.....



.....

.....

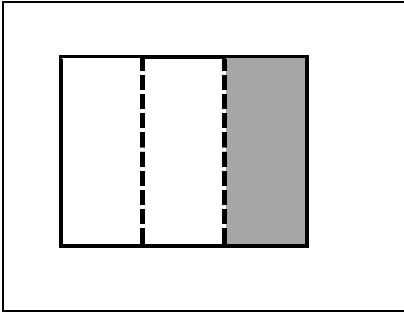
Okunuşu:.....



.....

.....

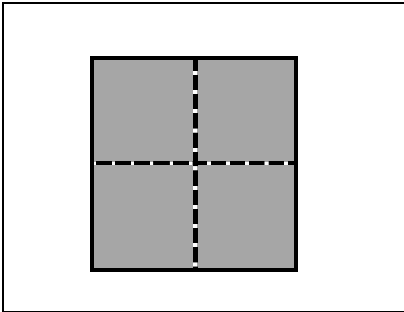
Okunuşu:.....



.....

.....

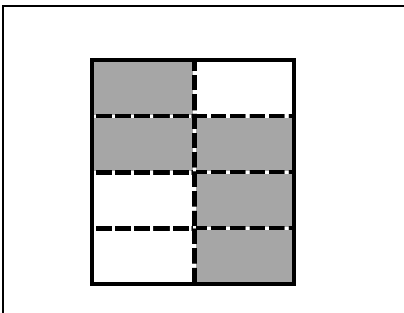
Okunuşu:.....



.....

.....

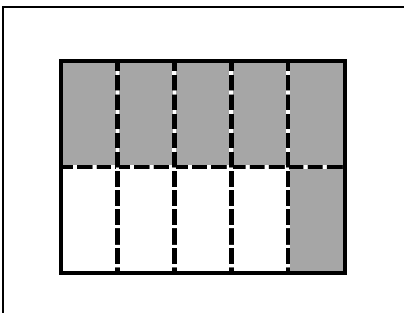
Okunuşu:.....



.....

.....

Okunuşu:.....



.....

.....

Okunuşu:.....