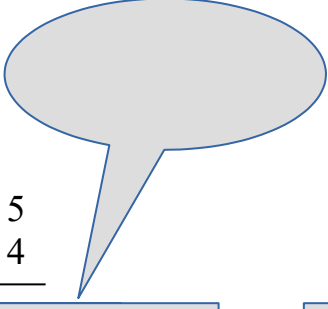


DOĞAL SAYILARDA ÇARPMA İŞLEMLERİ

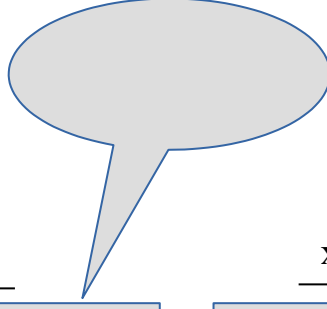
Aşağıdaki çarpma işlemlerini yapınız.




$$\begin{array}{r} 45 \\ \times 4 \\ \hline \end{array}$$



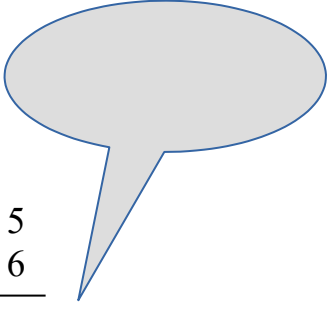
$$\begin{array}{r} 52 \\ \times 3 \\ \hline \end{array}$$




$$\begin{array}{r} 72 \\ \times 5 \\ \hline \end{array}$$



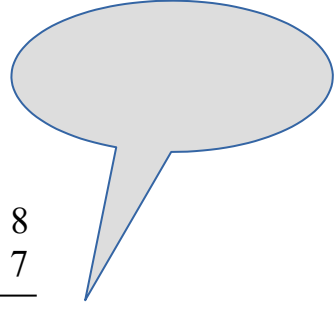
$$\begin{array}{r} 35 \\ \times 6 \\ \hline \end{array}$$




$$\begin{array}{r} 44 \\ \times 4 \\ \hline \end{array}$$




$$\begin{array}{r} 28 \\ \times 7 \\ \hline \end{array}$$







$$\begin{array}{r} \text{x} \\ 42 \\ \hline 3 \end{array}$$




$$\begin{array}{r} \text{x} \\ 18 \\ \hline 6 \end{array}$$




$$\begin{array}{r} \text{x} \\ 27 \\ \hline 1 \end{array}$$



$$\begin{array}{r} \text{x} \\ 91 \\ \hline 6 \end{array}$$



$$\begin{array}{r} \text{x} \\ 39 \\ \hline 2 \end{array}$$



$$\begin{array}{r} \text{x} \\ 14 \\ \hline 3 \end{array}$$

