

Adı:.....
Soyadı:.....

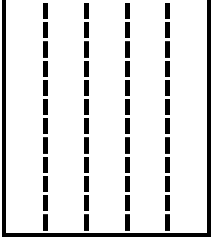
Sınıfı:.....
No:.....

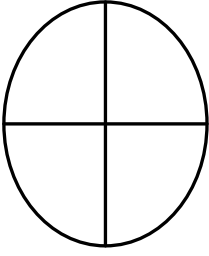
...../...../.....
.....


BİRİM KESİR

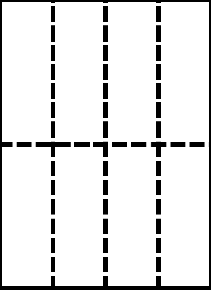
Bir bütünün eş parçalarından bir tanesine **birim kesir** denir .

Verilen kesir sayılarına göre şekillerimizi boyyalım. Ardından verilen kesrin birim kesrini yazalım.


KESİR SAYISI	KESRE UYGUN ŞEKİL	BİRİM KESİR
$\frac{4}{5}$		$\frac{\dots\dots}{\dots\dots}$

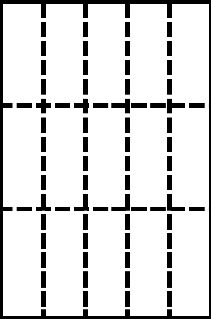
KESİR SAYISI	KESRE UYGUN ŞEKİL	BİRİM KESİR
$\frac{3}{4}$		$\frac{\dots\dots}{\dots\dots}$

KESİR SAYISI	KESRE UYGUN ŞEKİL	BİRİM KESİR
$\frac{2}{6}$		$\frac{\dots\dots}{\dots\dots}$

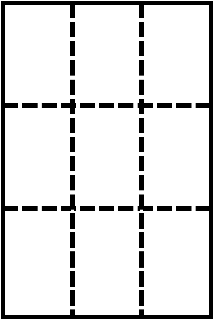
KESİR SAYISI	KESRE UYGUN ŞEKİL	BİRİM KESİR
$\frac{5}{8}$		$\frac{\dots\dots}{\dots\dots}$

KESİR SAYISI	KESRE UYGUN ŞEKİL	BİRİM KESİR
$\frac{7}{10}$		$\frac{\dots\dots}{\dots\dots}$

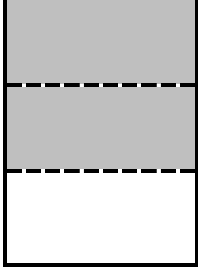
KESİR SAYISI	KESRE UYGUN ŞEKİL	BİRİM KESİR
$\frac{9}{12}$		$\frac{\dots\dots}{\dots\dots}$

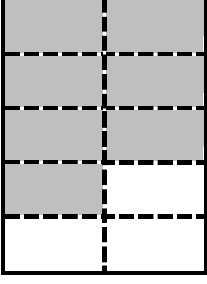
KESİR SAYISI	KESRE UYGUN ŞEKİL	BİRİM KESİR
$\frac{6}{15}$		$\frac{\dots\dots}{\dots\dots}$

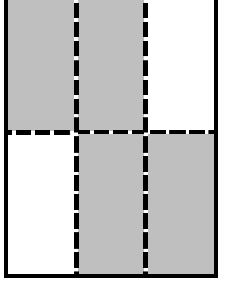
KESİR SAYISI	KESRE UYGUN ŞEKİL	BİRİM KESİR
$\frac{4}{7}$		$\frac{\dots\dots}{\dots\dots}$

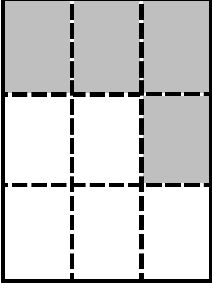
KESİR SAYISI	KESRE UYGUN ŞEKİL	BİRİM KESİR
$\frac{7}{9}$		$\frac{\dots\dots}{\dots\dots}$

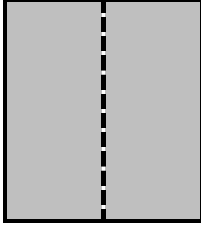
Verilen şeklimize uygun olarak önce kesir sayımızı sonrada birim kesrini yazalım.

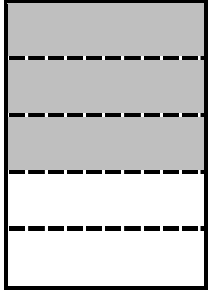
KESİR SAYISI	KESRE UYGUN ŞEKİL	BİRİM KESİR
.....	


KESİR SAYISI	KESRE UYGUN ŞEKİL	BİRİM KESİR
.....	

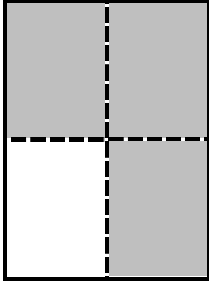
KESİR SAYISI	KESRE UYGUN ŞEKİL	BİRİM KESİR
.....	


KESİR SAYISI	KESRE UYGUN ŞEKİL	BİRİM KESİR
.....	

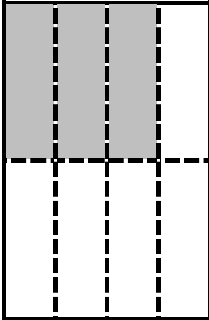
KESİR SAYISI	KESRE UYGUN ŞEKİL	BİRİM KESİR
.....	

KESİR SAYISI	KESRE UYGUN ŞEKİL	BİRİM KESİR
.....	

KESİR SAYISI	KESRE UYGUN ŞEKİL	BİRİM KESİR
.....	

KESİR SAYISI	KESRE UYGUN ŞEKİL	BİRİM KESİR
.....	

KESİR SAYISI	KESRE UYGUN ŞEKİL	BİRİM KESİR
.....	

KESİR SAYISI	KESRE UYGUN ŞEKİL	BİRİM KESİR
.....	

KESİR SAYISI	KESRE UYGUN ŞEKİL	BİRİM KESİR
.....	