

# ÇARPMA İŞLEMLERİ

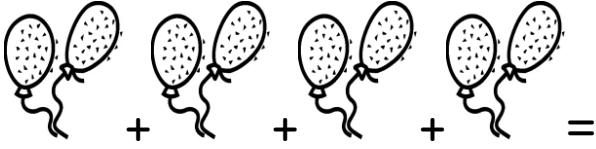
Aşağıdaki yıldızları sayarak çarpma işlemine çevirelim.



$$4 + 4 + 4 =$$

$$3 \times 4 = 12$$

Aşağıda verilen balonları sayarak çarpma işlemine çevirelim.



$$2 + 2 + 2 + 2 =$$


$$4 \times 2 = 8$$

Sizde yukarıdaki verilenler gibi aşağıdakileri yapınız.




$$..... + ..... + ..... =$$

$$..... \times ..... = .....$$



$$..... + ..... + ..... + ..... =$$

$$..... \times ..... = .....$$



$$..... + ..... = .....$$

$$..... \times ..... = .....$$



$$..... + ..... = .....$$

$$..... \times ..... = .....$$



$$..... + ..... + ..... + ..... + ..... =$$

$$..... \times ..... = .....$$

## ÇARPMA İŞLEMLERİ

Aşağıda toplama işlemi olarak verilenleri  
çarpma işlemine çeviriniz.

$$5 + 5 + 5 + 5 = 4 \times 5$$

$$6 + 6 = \dots\dots\dots$$

$$5 + 5 + 5 = \dots\dots\dots$$

$$3 + 3 + 3 + 3 = \dots\dots\dots$$

$$1 + 1 + 1 + 1 + 1 = \dots\dots\dots$$

$$7 + 7 + 7 = \dots\dots\dots$$

$$8 + 8 + 8 + 8 + 8 = \dots\dots\dots$$

$$5 + 5 + 5 + 5 + 5 + 5 =$$

$$9 + 9 + 9 =$$

$$4 + 4 + 4 + 4 + 4 + 4 + 4 =$$

$$8 + 8 + 8 + 8 =$$

$$1 + 1 + 1 + 1 + 1 + 1 =$$

$$3 + 3 + 3 + 3 + 3 + 3 + 3 + 3 + 3 =$$

$$6 + 6 + 6 + 6 + 6 + 6 =$$

$$5 + 5 + 5 + 5 + 5 =$$