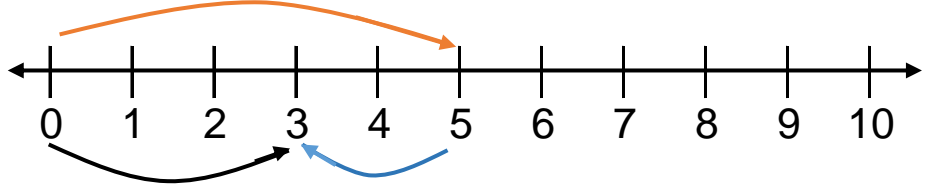


Adı Soyadı:

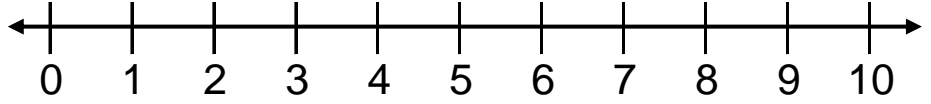
ÇIKARMA İŞLEMİ & SAYI DOĞRUSU

Verilen çıkarma işlemlerini örneğe uygun olarak yapınız.

$5 - 2 = \boxed{3}$



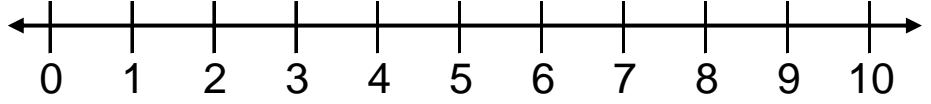
$7 - 1 = \boxed{}$



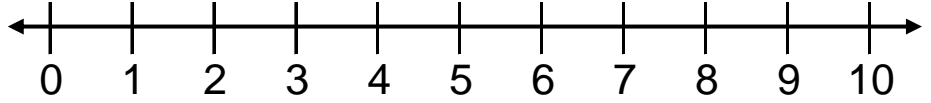
$4 - 1 = \boxed{}$



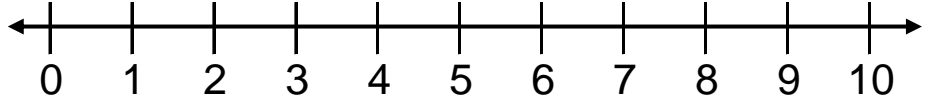
$6 - 2 = \boxed{}$



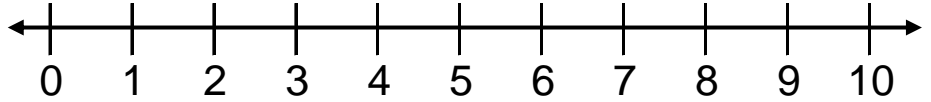
$7 - 2 = \boxed{}$



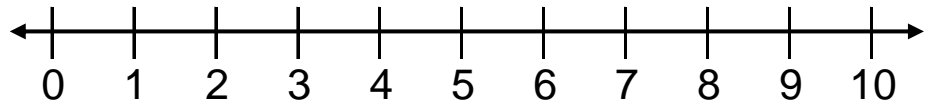
$6 - 3 = \boxed{}$



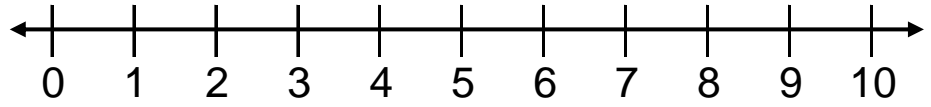
$5 - 4 = \boxed{}$



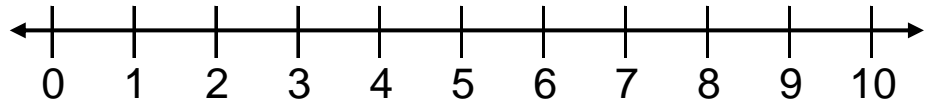
$3 - 2 = \square$



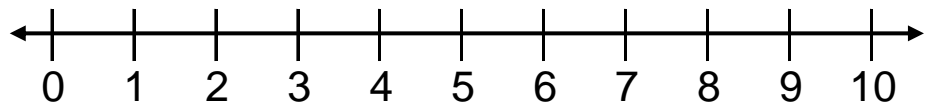
$9 - 7 = \square$



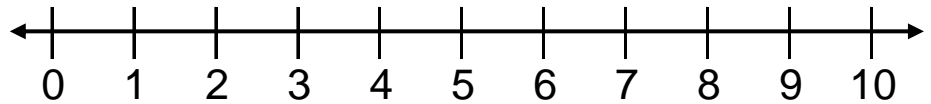
$3 - 1 = \square$



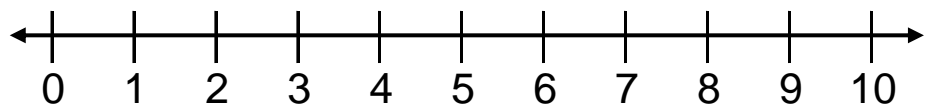
$2 - 2 = \square$



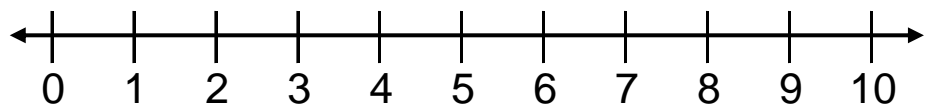
$10 - 4 = \square$



$6 - 1 = \square$



$5 - 3 = \square$



$8 - 2 = \square$

