

1. Aşağıdaki çıkarma işlemlerini yapınız.

$$8-3=$$

$$9-7=$$

$$9-3=$$

$$8-4=$$

$$6-2=$$

$$6-4=$$

$$9-5=$$

$$6-3=$$

$$7-3=$$

$$17-8=$$

$$17-4=$$

$$8-5=$$

$$19-9=$$

$$19-6=$$

$$13-5=$$










$$\begin{array}{r} 8 \\ - 5 \\ \hline \end{array}$$








$$\begin{array}{r} 9 \\ - 7 \\ \hline \end{array}$$









$$\begin{array}{r} 12 \\ - 4 \\ \hline \end{array}$$









$$\begin{array}{r} 15 \\ - 3 \\ \hline \end{array}$$

2. Aşağıdaki geriye birer ritmik saymalardaki boşlukları doldurunuz.

20 19          10

0 1        8 9

17 16         7

15 14         5

Hava soğuduğunda gölge veren ağaçları unutursun... Fatih Mehmet ÖVEÇ