


3. SINIFA HAZIRLIK - MATEMATİK


GEOMETRİK ŞEKİLLER - 1




Adı	
Köşe sayısı	
Kenar sayısı	



Adı	
Köşe sayısı	
Kenar sayısı	



Adı	
Köşe sayısı	
Kenar sayısı	



Adı	
Köşe sayısı	
Kenar sayısı	





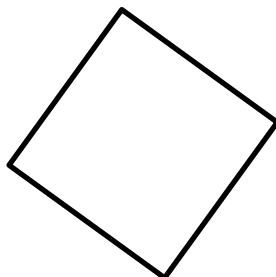

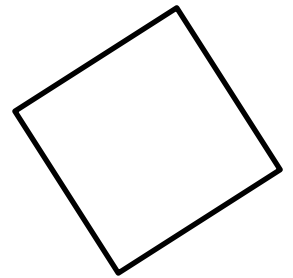



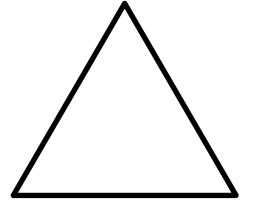

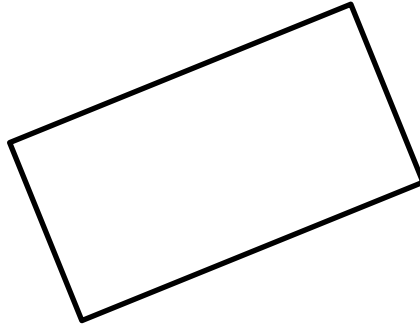
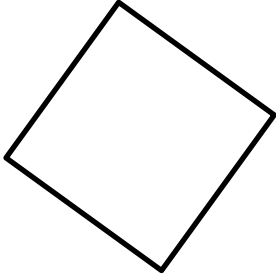


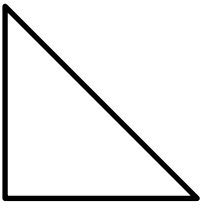
3. SINIFA HAZIRLIK - MATEMATİK

GEOMETRİK ŞEKİLLER - 2

Aşağıda verilen şekilleri istenilen renklerde boyayınız.


Dikdörtgen: **Mavi** Kare: **Kırmızı**

Üçgen: **Yeşil** Çember: **Turuncu**




3. SINIFA HAZIRLIK - MATEMATİK

GEOMETRİK ŞEKİLLER - 3




Yukarıdaki şekillere göre;


Kaç kare vardır?




Kaç çember vardır?



Kaç üçgen vardır?



Kaç dikdörtgen vardır?



3. SINIFA HAZIRLIK - MATEMATİK

GEOMETRİK ŞEKİLLER - 4

Aşağıdaki şekillerde oklarla gösterilen yerlerini isimlerini yazınız.

