






























## TOPLAMA İŞLEMİ

1. Etkinlik: Aşağıdaki toplama işlemlerini zihinden yapalım.

 $30 + 20 = \dots$ 	 $50 + 10 = \dots$ 	 $40 + 20 = \dots$ 	 $30 + 50 = \dots$ 
 $10 + 70 = \dots$ 	 $80 + 20 = \dots$ 	 $50 + 40 = \dots$ 	 $30 + 30 = \dots$ 
 $20 + 20 = \dots$ 	 $80 + 10 = \dots$ 	 $50 + 50 = \dots$ 	 $40 + 30 = \dots$ 

2. Etkinlik: Aşağıdaki toplama işlemlerini örnekteki gibi zihinden yapalım.



$20 + 15 = 35$ $20 + 10 = 30$ $30 + 5 = 35$	$40 + 27 = \dots$ $\dots + \dots = \dots$ $\dots + \dots = \dots$	$80 + 16 = \dots$ $\dots + \dots = \dots$ $\dots + \dots = \dots$	$20 + 43 = \dots$ $\dots + \dots = \dots$ $\dots + \dots = \dots$
$34 + 30 = \dots$ $\dots + \dots = \dots$ $\dots + \dots = \dots$	$58 + 10 = \dots$ $\dots + \dots = \dots$ $\dots + \dots = \dots$	$62 + 30 = \dots$ $\dots + \dots = \dots$ $\dots + \dots = \dots$	$20 + 29 = \dots$ $\dots + \dots = \dots$ $\dots + \dots = \dots$
$70 + 14 = \dots$ $\dots + \dots = \dots$ $\dots + \dots = \dots$	$45 + 30 = \dots$ $\dots + \dots = \dots$ $\dots + \dots = \dots$	$52 + 40 = \dots$ $\dots + \dots = \dots$ $\dots + \dots = \dots$	$60 + 21 = \dots$ $\dots + \dots = \dots$ $\dots + \dots = \dots$
$40 + 18 = \dots$ $\dots + \dots = \dots$ $\dots + \dots = \dots$	$50 + 29 = \dots$ $\dots + \dots = \dots$ $\dots + \dots = \dots$	$13 + 60 = \dots$ $\dots + \dots = \dots$ $\dots + \dots = \dots$	$42 + 40 = \dots$ $\dots + \dots = \dots$ $\dots + \dots = \dots$

