






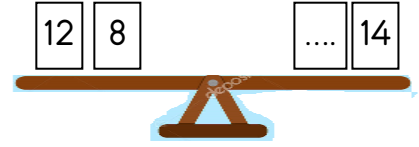










EŞİTLİK KAVRAMI

1. Etkinlik: Aşağıdaki tahtaravallilerin dengede durabilmesi için noktalı yerlere gelecek sayıları bulalım.



2. Etkinlik: Aşağıda verilen işlemlerde eşitliğin sağlanması için kutulara gelecek sayıları bulalım. Bulduğumuz sayıyı aşağıda boyayalım.

$$4 + 5 = 3 + \boxed{\text{....}}$$

5 6 9

$$6 + 7 = \boxed{\text{....}} + 3$$

10 13 9

$$\boxed{\text{....}} + 8 = 10 + 7$$

17 10 9

$$9 - 4 = 7 - \boxed{\text{....}}$$

5 2 3

$$12 - 6 = 8 - \boxed{\text{....}}$$

6 1 2

$$\boxed{\text{....}} - 5 = 10 - 2$$

13 8 12

$$\boxed{\text{....}} + 10 = 30 + 20$$

40 50 30

$$5 + 5 = 16 - \boxed{\text{....}}$$

10 7 6

$$\boxed{\text{....}} + 5 = 20 - 8$$

6 7 12

$$\boxed{\text{....}} - 20 = 10 + 30$$

40 60 50

$$15 + \boxed{\text{....}} = 50 - 30$$

5 20 4

$$\boxed{\text{....}} - 8 = 9 + 7$$

16 24 23