



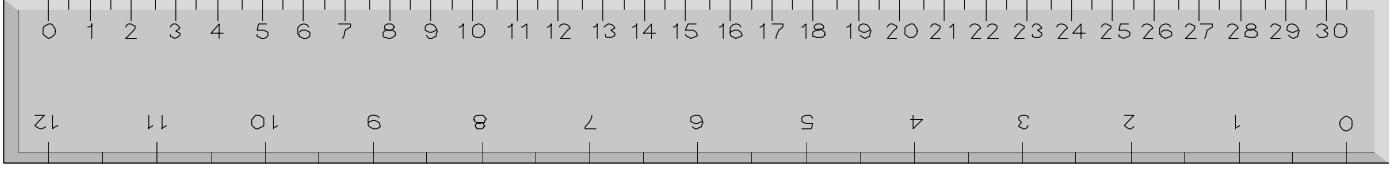
ADI-SOYADI:

Uzunlukları ölçüyorum

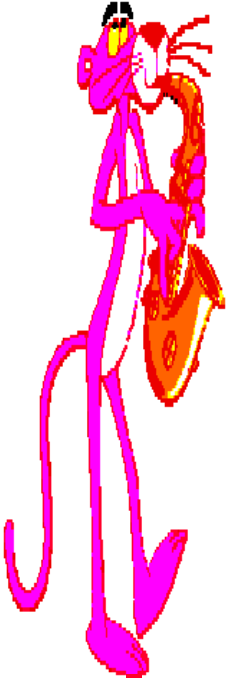
2.SINIF
MATEMATİK

A a ıdaki ölçüm aracının adı nedir?


Cevap:



Şimdi, siz de kendi cetvelinizi sınıfta öğrendiğimiz şekliyle kullanarak, aşağıdakilerin boylarını ölçer misiniz? Ölçüm sonuçlarınızı altındaki kutulara yazınız.




..... cm



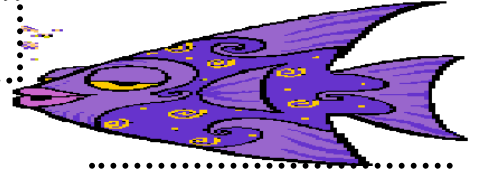
..... cm




..... cm




..... cm




..... cm




..... cm



..... cm



..... cm



..... cm

Veli:.....

Öğretmen:.....