



ADI-SOYADI:

Kesirler

2.SINIF
MATEMATİK



1 bütün elma



..... yarım elma eder.



2 bütün karpuz



..... yarım karpuz eder.



4 yarım armut



..... bütün armut eder.




6 yarım elma, bütün elma eder.



16 yarım yaprak, bütün yaprak eder.



3 bütün simit, çeyrek simit eder.



12 armudun yarısı kaç armut eder? Çizerek ayırınız.


12 armudun yarısı armut eder.



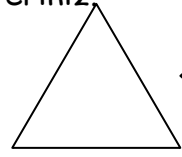
Aşağıdaki kesir ifadelerini şekil üzerinde çizerek gösteriniz.



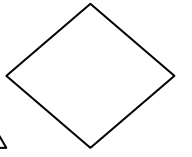
yarım



çeyrek






yarım



çeyrek



Şekillerin boyalı kısımlarının neyi ifade ettiğini noktalı yere yazınız.



.....

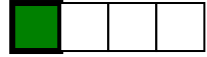
.....

.....

.....



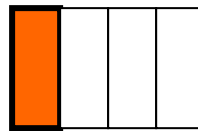
.....



.....



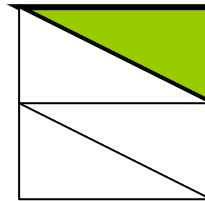
Aşağıdaki şekillerden yeteri kadar bölge boyayarak istenilen kısma tamamlayınız.



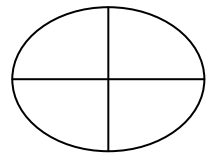
yarıma



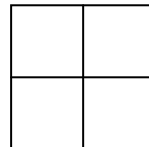
bütüne



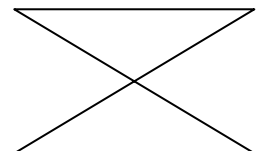
yarıma



çeyreğe



yarıma



bütüne