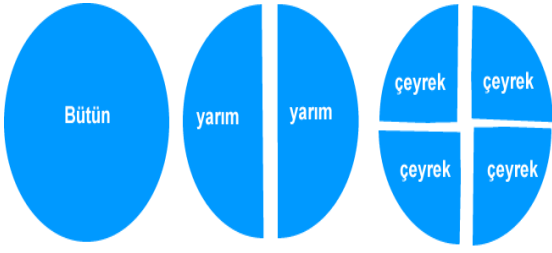




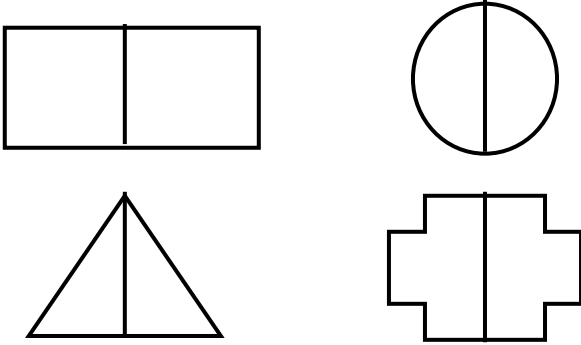
ADI-SOYADI:

Kesirler

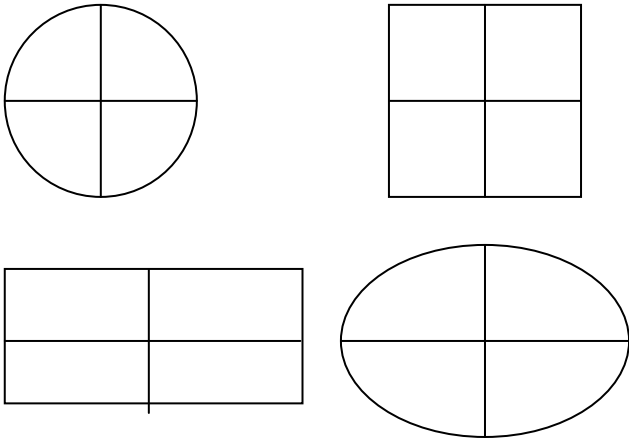
2.SINIF
MATEMATİK




1. Aşağıdaki şekillerin yarısını boyayınız.




2. Aşağıdaki şekillerin çeyreğini boyayınız.



3. Aşağıdakilerden hangisi bütündür?



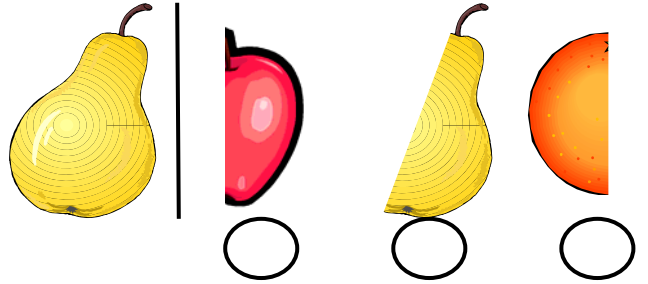
4. Aşağıdakilerden hangisi yarımı gösterir?




5. Baştaki nesnenin yarısı hangisidir?



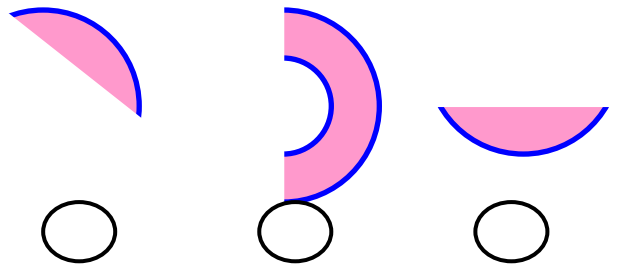
6. Baştaki nesnenin yarısı hangisidir?



7. Aşağıdakilerden hangisi bütünü gösterir?



8.  şeklinin yarısı hangisidir?



9. Aşağıdaki bütün kabaklardan kaç tane yarım kabak oluşur?



A) 8 B) 10 C) 14