




..... İLKOKULU MATEMATİK DERSİ DOĞAL SAYILAR ÇALIŞMASI


 Aşağıda verilen sayılarda oklarla belirtilen rakamların bulunduğu basamağın basamak değerini yazınız.


92 354 


426 852 

84 207 


96 425 

286 328 


56 634 

75 254 


6 436 


804 207 


23 265 

600 400 

231 144 

37 367 


583 890 


304 562 


1 458 


3 264 


808 454 

87 464 

426 852 

450 450 

40 404 

610 810 

199 810 