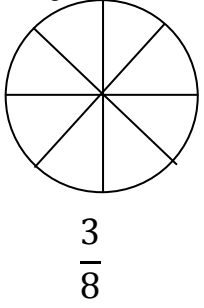
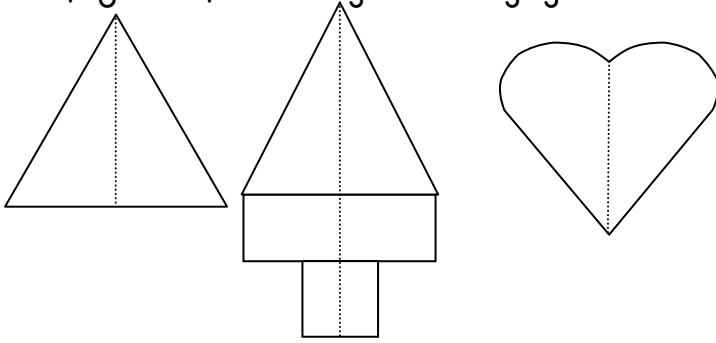


1)Aşağıdaki şeklin belirtilen kesir kadarını boyayıp okunuşunu yazınız.(paydadana paya doğru okuyunuz.)

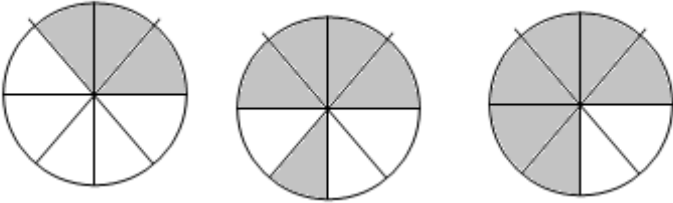


Okunuşu:.....

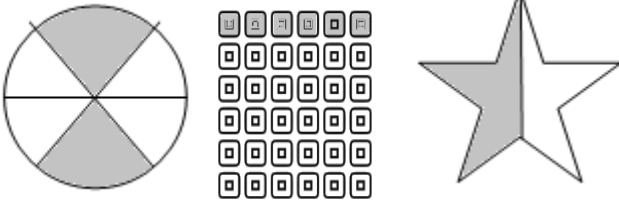
2)Aşağıdaki şekillerin yarısını boyayınız.



3)Aşağıdaki bütünlerin boyalı kısımlarını kesir olarak yazınız.



.....



4)Aşağıdaki kesirlerin okunuşlarını yazınız.

a) $\frac{2}{5}$ =

c) $\frac{21}{29}$ =

b) $\frac{3}{11}$ =

d) $\frac{32}{72}$ =

e) $\frac{21}{60}$ =

f) $\frac{19}{33}$ =

5)Aşağıda okunuşları verilmiş olan kesirleri yazınız.

a) 7 tane $\frac{1}{12}$ =

c) 4 tane $\frac{1}{5}$ =

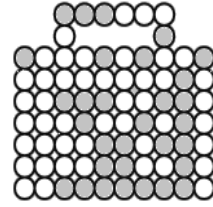
b) 3 tane $\frac{1}{4}$ =

d) 12 tane $\frac{1}{30}$ =

e) 6 tane $\frac{1}{7}$ =


f) 5 tane $\frac{1}{6}$ =

6)Aşağıdaki çoklukların boyalı olanlarını, kesir olarak yazınız.



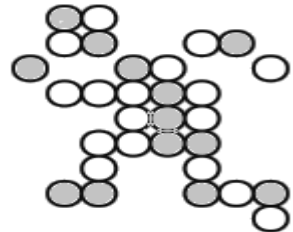
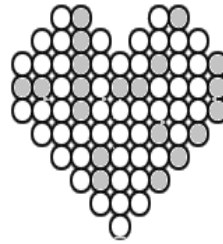
.....

.....



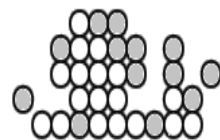
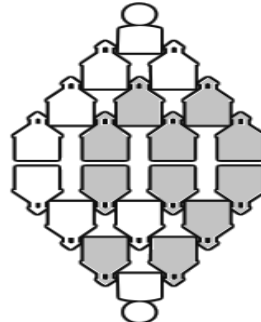
.....

.....



.....

.....

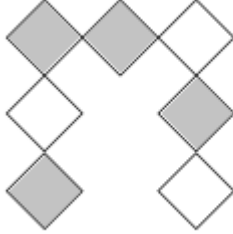




.....

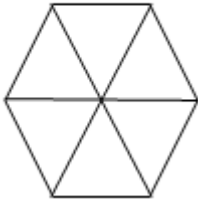
.....

7) Aşağıdaki kesirleri, karşılık geldikleri şekillerle eşleştiriniz.


- $\frac{2}{6}$
- $\frac{4}{7}$
- $\frac{2}{3}$
- $\frac{3}{5}$



8) Aşağıdaki bütünlerin kesirlerin belirtilen kesir kadarını boyayınız.

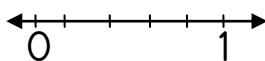

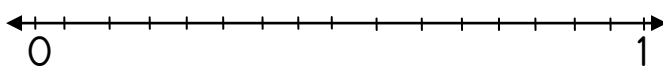
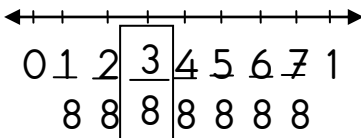



$$\frac{3}{6}$$

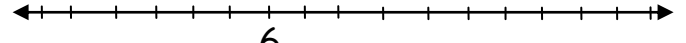

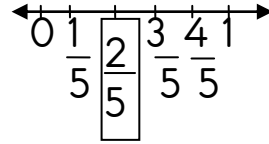


$$\frac{4}{9}$$

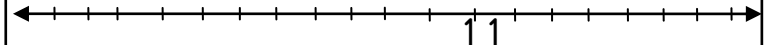
9) Aşağıdaki kesirleri, sayı doğrusunda gösteriniz.



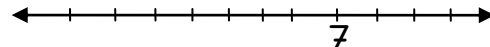
10) Aşağıdaki sayı doğrusunda belirtilen kesirleri örnekteki gibi kareli alana çizerek gösteriniz.



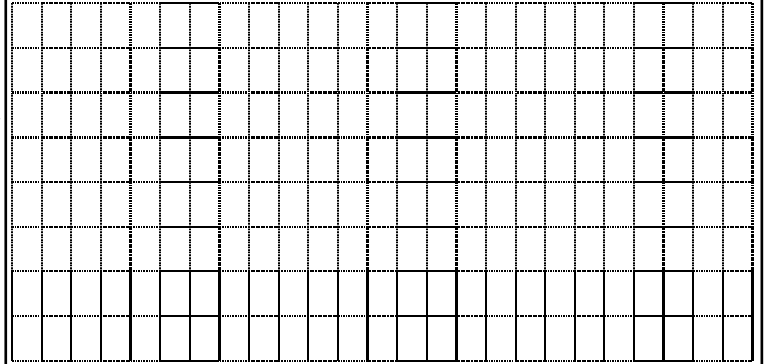
$$\frac{2}{6}$$



$$\frac{11}{18}$$




$$\frac{7}{10}$$



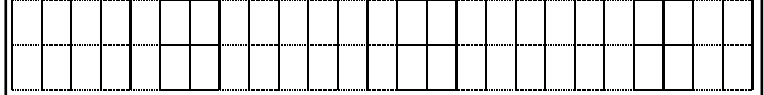
Aşağıda okunuşları verilen kesirleri yazınız.

Şekille gösteriniz.

Dokuzda altı:



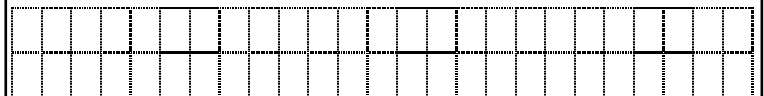
Yirmi yedide on iki :



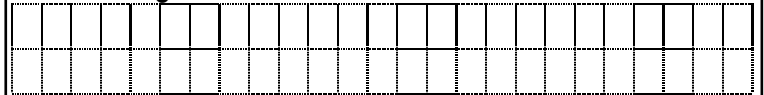
Otuz ikide on yedi:



Ellide otuz dört:



On üçte yedi:



Yirmi beşte on sekiz:

