


ZAMANI ÖLÇME

Ad :


Soyad:




YÖNERGE: Aşağıda verilen saatlerin akrep ve yelkovanını çiziniz.



10 : 30






07 : 00



06 : 30



YÖNERGE: Aşağıda verilen saatleri kutucuklara yazınız.



Başarılar.

