

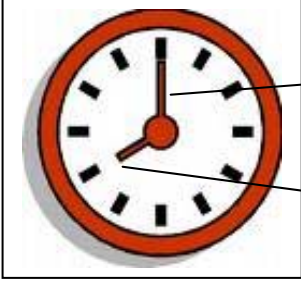


ADI-SOYADI:

Tam ve yarım saatleri okuma ve ayarlama

2.SINIF
MATEMATİK

Zamanı saat ile ölçeriz.



Saatin üzerindeki uzun çubuğun adına yelkovan denir.

Saatin üzerindeki kısa çubuğun adına akrep denir.

Yelkovan dakikalara, akrep ise saatleri gösterir.

1 gün 24 saattir.

1 saat 60 dakikadır.

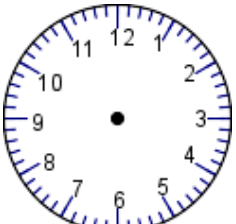
Aşağıdaki saatlerin okunuşlarını altlarına yazalım.



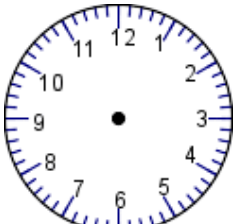
Saat: 4:00



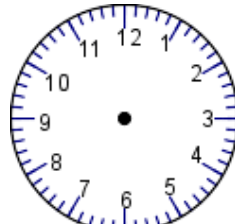
Aşağıda okunuşları verilen saatleri çizerek gösterelim.



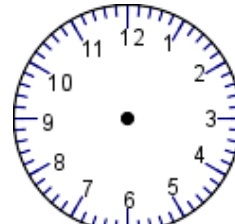
Saat: 5:00



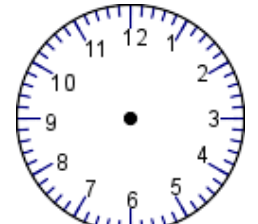
Saat: 2.30



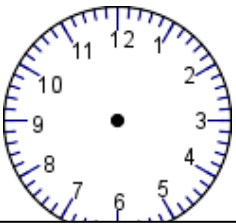
Saat: 7.30



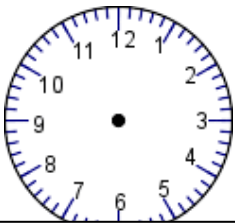
Saat: 1.30



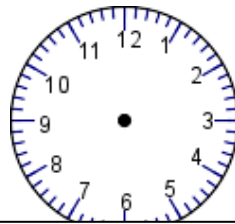
Saat: 3:00



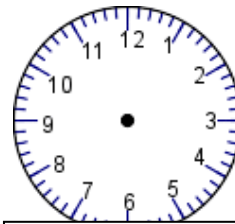
Saat: 9.30



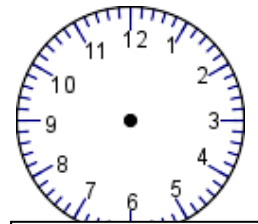
Saat: 12:00



Saat: 4.30



Saat: 10.30



Saat: 5.30

Veli:.....

Öğretmen:.....