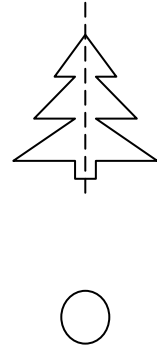
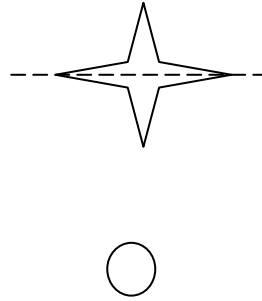
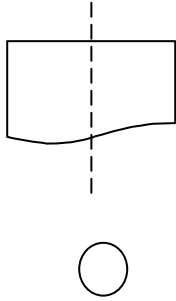
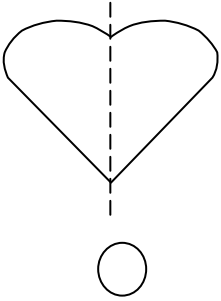
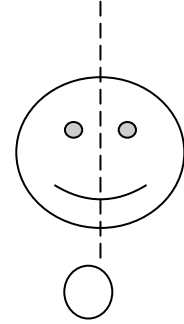
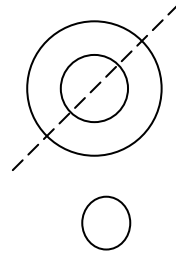
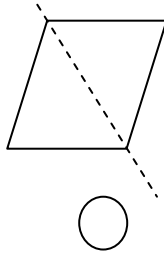
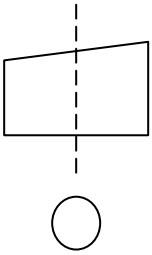
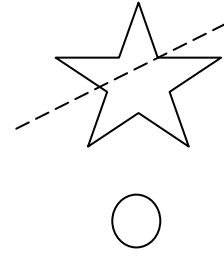
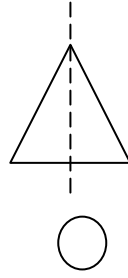
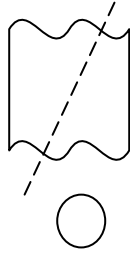
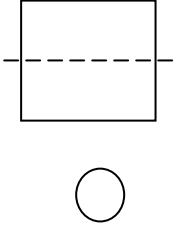


ÖĞRENME ALANI : Geometri

ALT ÖĞR. ALANI : Simetri

Aşağıda verilen örneklerde simetrik olanları işaretleyiniz



ÖLÇME VE DEĞERLENDİRME

1. Simetrinin ne anlama geldiğini kendi cümlelerinizle anlatınız.

2. Evinizden ve sınıfınızdan simetrik olan nesnelere örnekler veriniz.