



ADI-SOYADI:

Basamak adları-basamak değeri-sayı değeri

2.SINIF
MATEMATİK
30.09.2010


Aşağıdaki sayıların basamak adlarını, rakamların basamak ve sayı değerlerini yazalım.

Basamak adları

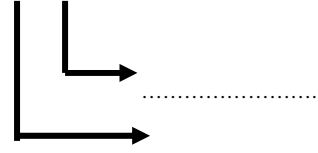
Basamak değeri

Sayı değeri

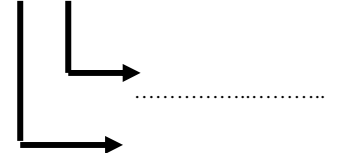
15




15



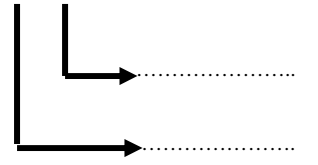
15



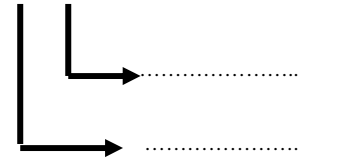
29




29



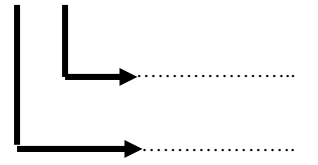
29



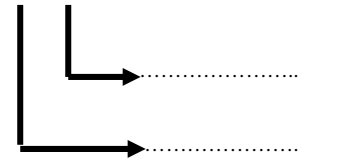
90




90



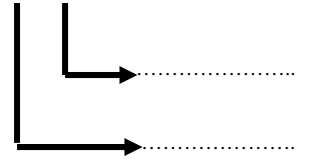
90



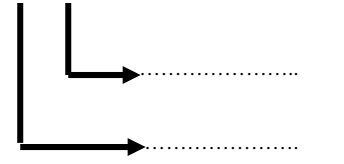
45




45



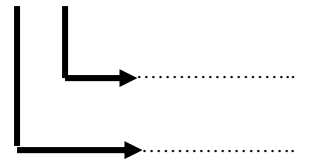
45



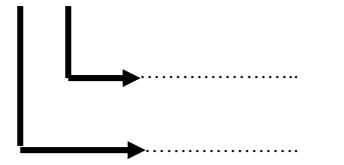
83



83



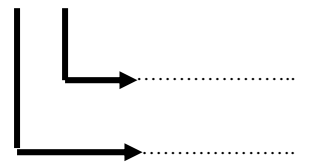
83



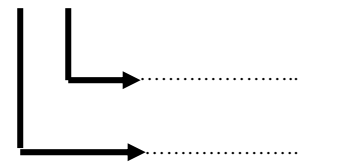
70



70



70



Veli:.....

Öğretmen:.....