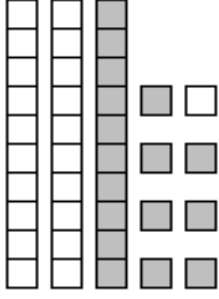


TABAN BLOKLARI İLE ÇIKARMA İŞLEMİNİN GÖSTERİLMESİ

ETKİNLİK - 2

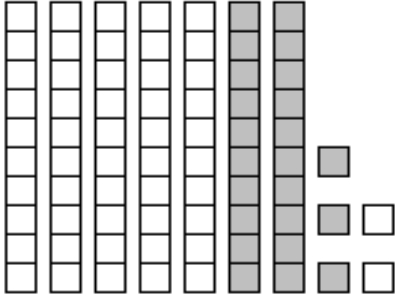
Aşağıda örneği verilen verilen taban blokları ile çıkarma işlemlerini yapınız.

Örnek:

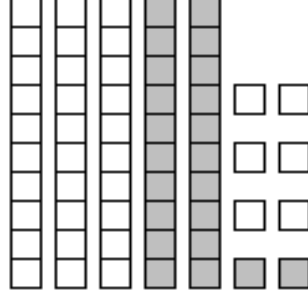


$$38 - 17 = 21$$

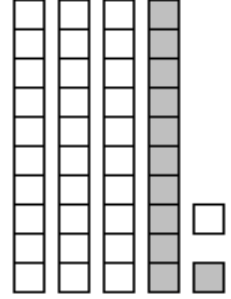
Taban bloklar toplamı	=	38
Boyalı bloklar toplamı	=	<u>17</u>
Boyasız bloklar toplamı	=	21



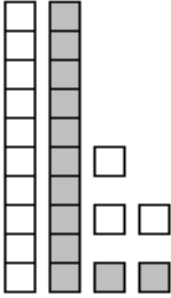
$$75 - \quad = 52$$



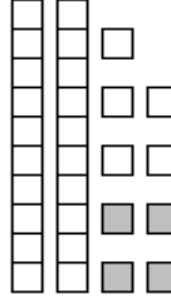
$$\quad - 22 = 36$$



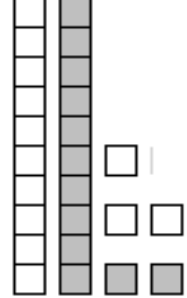
$$77 - \quad = 54$$



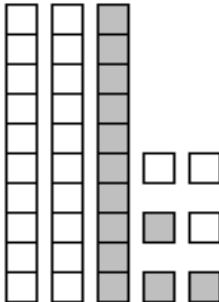
$$\quad - \quad = \quad$$



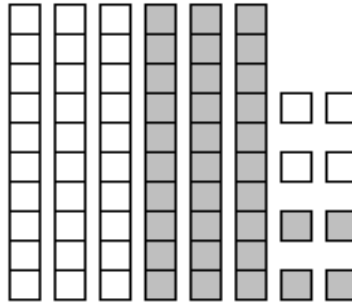
$$\quad - \quad = \quad$$



$$\quad - \quad = \quad$$



$$\quad - \quad = \quad$$



$$\quad - \quad = \quad$$



$$\quad - \quad = \quad$$

