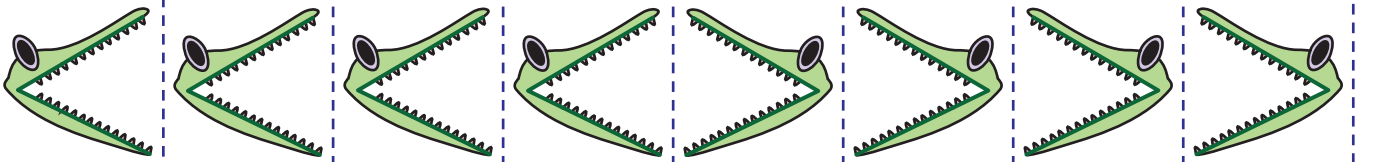


Adı Soyadı:

Sayıları Karşılaştırma

Timsah fazla olan sayıları yemek istiyor. Aşağıda verilen timsahları, keserek kutulara yapıştırınız.


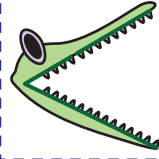
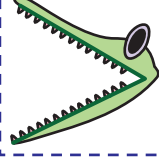
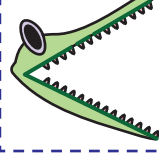
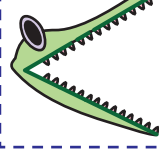

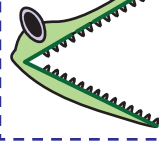

1	25		16
2	7		11
3	56		48
4	32		37
5	74		84
6	10		6
7	15		25
8	9		4



Adı Soyadı:

Cevaplar

Timsah fazla olan sayıları yemek istiyor. Aşağıda verilen timsahları, keserek kutulara yapıştırınız.

1	25		16
2	7		11
3	56		48
4	32		37
5	74		84
6	10		6
7	15		25
8	9		4

