
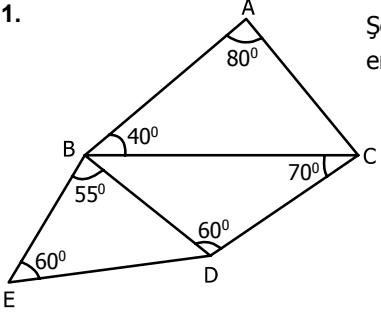
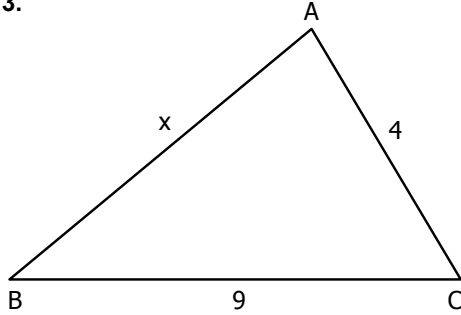
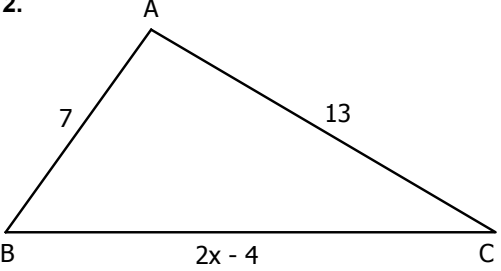
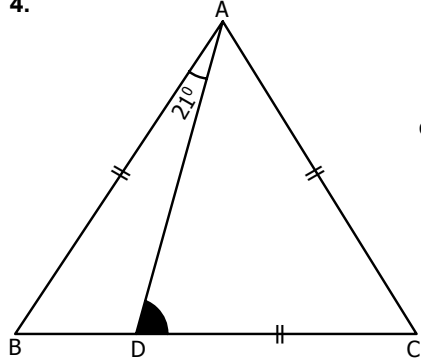
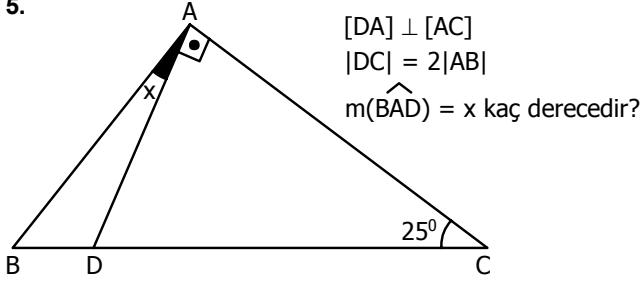


2009 - 2010 ÖĞRETİM YILI
ZONGULDAK ATATÜRK ANADOLU LİSESİ
9/A SINIFI GEOMETRİ DERSİ 2. DÖNEM 1. YAZILI SORULARIDIR.

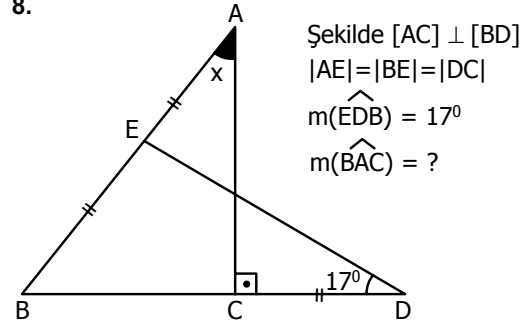


ADI SOYADI:	SINIF VE NO:	A GRUBU	21.04.2010	ALDIĞI PUAN:
1.	 <p>Şekilde verilenlere göre en uzun kenar hangisidir?</p>	3.	 <p>$AC = 4 \text{ cm}$ $BC = 9 \text{ cm}$ $m(\hat{C}) < m(\hat{A})$</p> <p>Yukarıdaki verilere göre $AB = x$ in alabileceği tamsayı değerleri toplamı kaçtır?</p>	
2.	 <p>Yukarıdaki verilere göre x kaç farklı tamsayı değeri alır?</p>	4.	 <p>$AB = AC = DC$ $m(\hat{BAD}) = 21^\circ$ olduğuna göre, $m(\hat{ADC}) = ?$</p>	

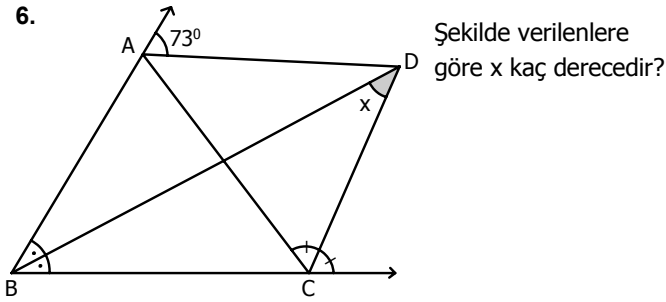
5.



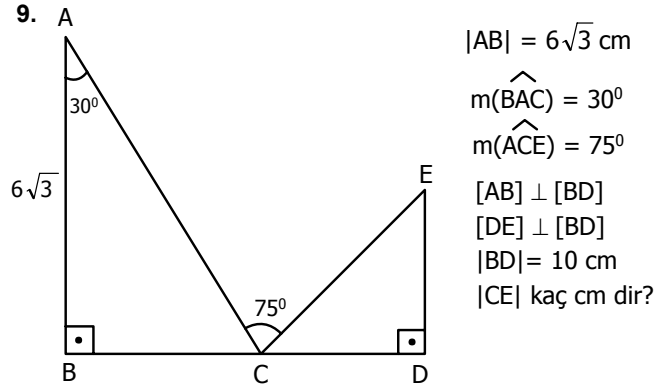
8.



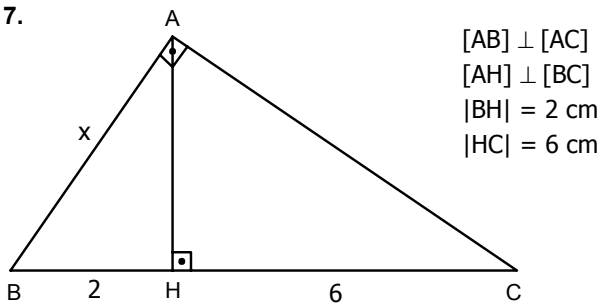
6.



9.



7.

Yukarıdaki verilere göre $|AB| = x$ kaç cm dir?

10.

