

NAZİRE MERZECİ İLKOKULU 2/B SINIFI BÖLME İŞLEMİ ÇALIŞMA SAYFALARI



NESNELERİ SAYARAK GRUPLA, İŞLEMLERİ SONRA YAP




	$20 \div 10 = \square$
-----------------------------------------------------------------------------------	------------------------

	$18 \div 9 = \square$
----------------------------------------------------------------------------------	-----------------------

	$16 \div 8 = \square$
----------------------------------------------------------------------------------	-----------------------

	$15 \div 5 = \square$
----------------------------------------------------------------------------------	-----------------------


	$14 \div 7 = \square$
----------------------------------------------------------------------------------	-----------------------

	$12 \div 6 = \square$
----------------------------------------------------------------------------------	-----------------------


	$10 \div 5 = \square$
------------------------------------------------------------------------------------	-----------------------

NESNELERİ SAYARAK GRUPLA, İŞLEMLERİ SONRA YAP

	$6 \div 3 = \square$
------------------------------------------------------------------------------------	----------------------

	$9 \div 3 = \square$
------------------------------------------------------------------------------------	----------------------

	$12 \div 6 = \square$
------------------------------------------------------------------------------------	-----------------------

	$4 \div 2 = \square$
------------------------------------------------------------------------------------	----------------------

	$8 \div 4 = \square$
------------------------------------------------------------------------------------	----------------------

	$14 \div 2 = \square$
-------------------------------------------------------------------------------------	-----------------------

	$15 \div 5 = \square$
-------------------------------------------------------------------------------------	-----------------------

NESNELERİ SAYARAK GRUPLA, İŞLEMLERİ SONRA YAP



$12 \div 6 = \square$



$8 \div 4 = \square$



$10 \div 2 = \square$



$6 \div 2 = \square$



$8 \div 2 = \square$



$14 \div 7 = \square$



$15 \div 3 = \square$

NESNELERİ SAYARAK GRUPLA, İŞLEMLERİ SONRA YAP



$16 \div 2 = \square$



$14 \div 2 = \square$



$15 \div 3 = \square$



$12 \div 4 = \square$



$10 \div 2 = \square$



$9 \div 3 = \square$



$8 \div 4 = \square$

NESNELERİ SAYARAK GRUPLA, İŞLEMLERİ SONRA YAP

 $16 \div 8 = \square$


 $14 \div 7 = \square$

 $15 \div 5 = \square$

 $12 \div 6 = \square$

 $10 \div 5 = \square$

 $9 \div 3 = \square$

 $8 \div 2 = \square$

NESNELERİ SAYARAK GRUPLA, İŞLEMLERİ SONRA YAP

 $20 \div 2 = \square$

 $18 \div 3 = \square$

 $16 \div 4 = \square$

 $15 \div 3 = \square$

 $14 \div 2 = \square$

 $12 \div 3 = \square$

 $10 \div 5 = \square$

NESNELERİ SAYARAK GRUPLA, İŞLEMLERİ SONRA YAP



$12 \div 3 = \square$



$10 \div 2 = \square$



$9 \div 3 = \square$



$8 \div 2 = \square$



$6 \div 3 = \square$

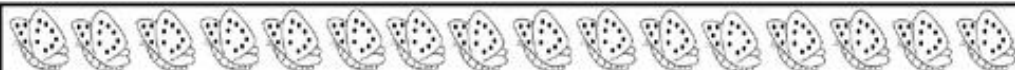


$4 \div 2 = \square$



$3 \div 1 = \square$

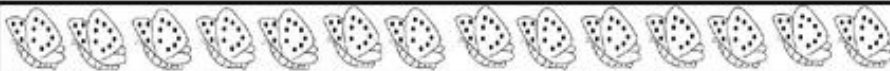
NESNELERİ SAYARAK GRUPLA, İŞLEMLERİ SONRA YAP



$16 \div 8 = \square$



$15 \div 5 = \square$



$14 \div 7 = \square$



$12 \div 3 = \square$



$10 \div 2 = \square$



$9 \div 3 = \square$



$8 \div 2 = \square$

NESNELERİ SAYARAK GRUPLA, İŞLEMLERİ SONRA YAP



$6 \div 2 = \square$



$4 \div 4 = \square$



$8 \div 4 = \square$



$6 \div 3 = \square$



$8 \div 2 = \square$



$3 \div 3 = \square$



$9 \div 3 = \square$

NESNELERİ SAYARAK GRUPLA, İŞLEMLERİ SONRA YAP



$9 \div 3 = \square$



$14 \div 2 = \square$



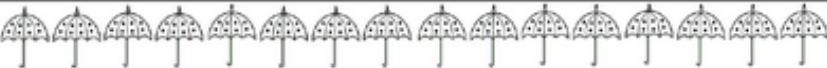
$20 \div 2 = \square$



$10 \div 5 = \square$



$6 \div 3 = \square$



$16 \div 2 = \square$



$4 \div 4 = \square$

SİZLER ÇOK ÖZEL ÖĞRENCİLER SİNİZ...



Nevin YÜCEL
2/B Sınıf Öğretmeni