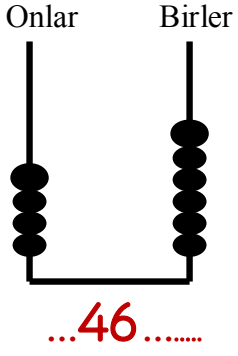
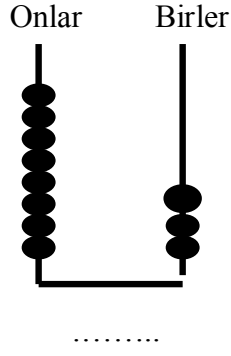


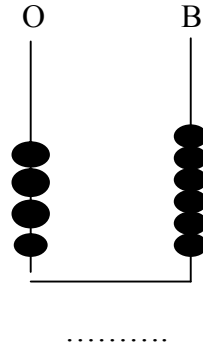
Abaküste gösterilen sayıları örnekteki gibi rakamla ve okunuşlarını yazarak tamamlayınız.



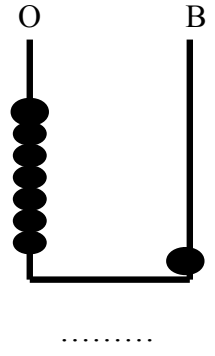
.....kırk altı.....



.....

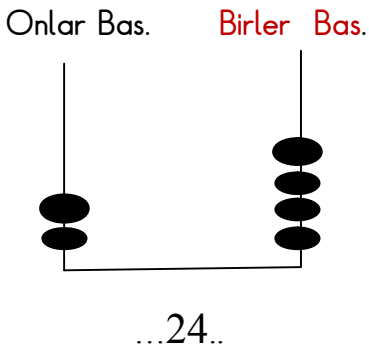


.....

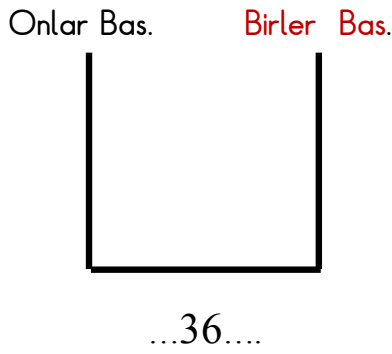


.....

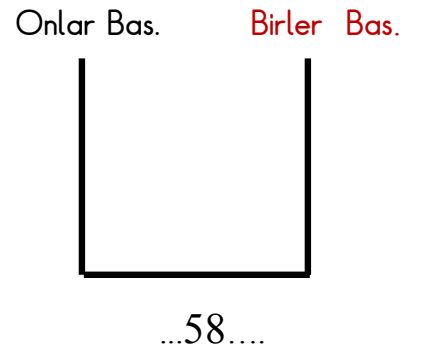
Aşağıda verilen doğal sayıları örnekteki gibi abaküste göstererek okunuşlarını yazınız.



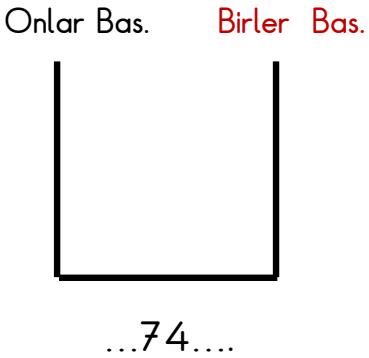
.....yirmi dört.....



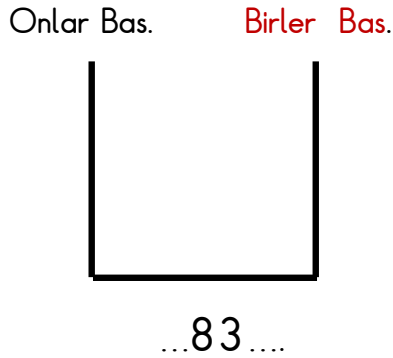
.....



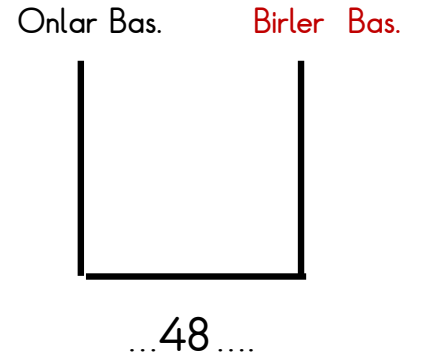
.....



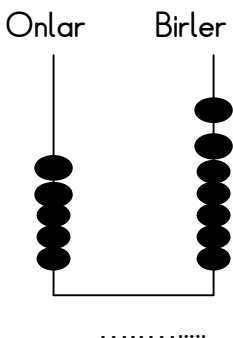
.....



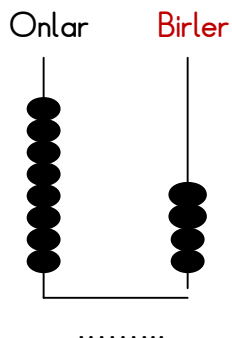
.....



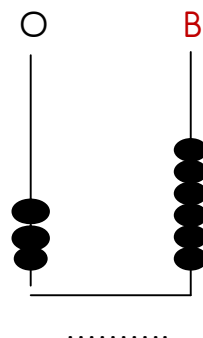
.....



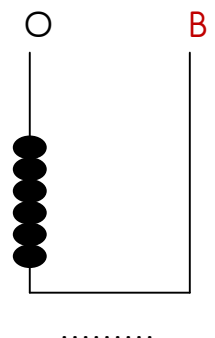
.....



.....



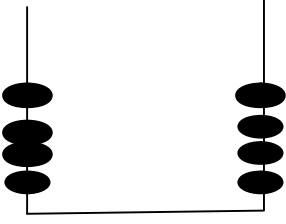
.....



.....

Aşağıda verilen doğal sayıları örnekteki gibi abaküste göstererek okunuşlarını yazınız.


Onlar Bas. Birler Bas.



...44..

.....kırk dört.....


Onlar Bas. Birler Bas.



...58....

.....


Onlar Bas. Birler Bas.



...68....

.....


Onlar Bas. Birler Bas.



...52....

.....


Onlar Bas. Birler Bas.



...61....

.....

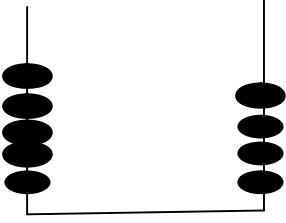
Onlar Bas. Birler Bas.



...37....

.....


Onlar Bas. Birler Bas.



.....

.....

Onlar Bas. Birler Bas.



... 53

.....


Onlar Bas. Birler Bas.



...74....

.....


Onlar Bas. Birler Bas.



...47....

.....


Onlar Bas. Birler Bas.



...92....

.....

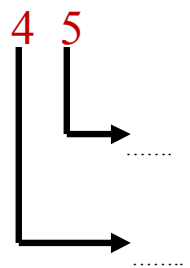
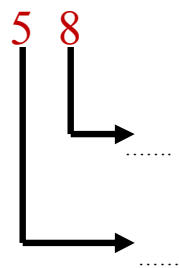
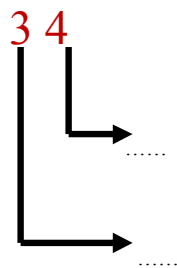
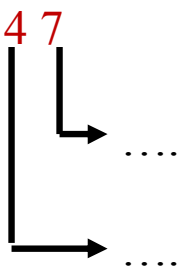
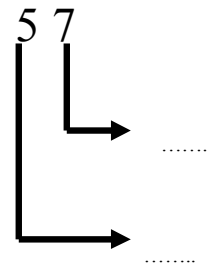
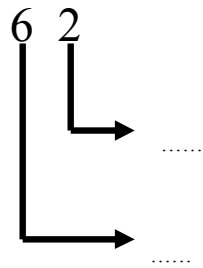
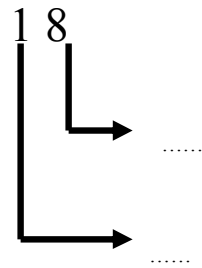
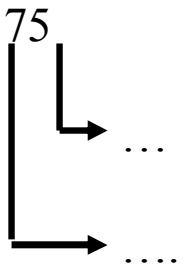
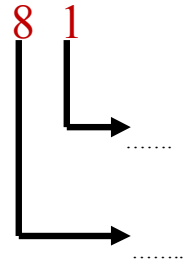
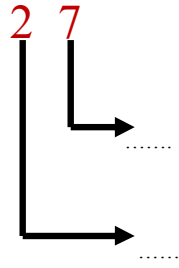
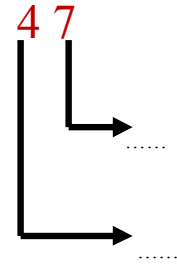
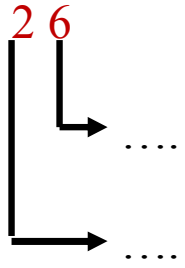
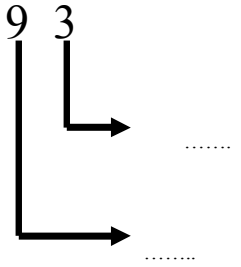
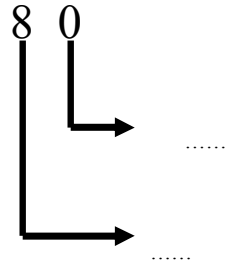
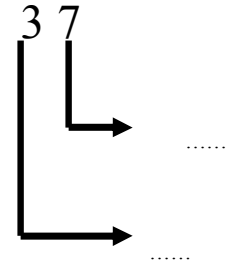
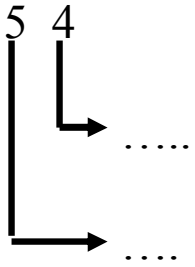
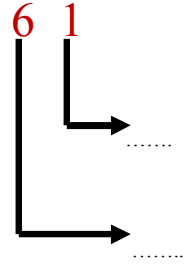
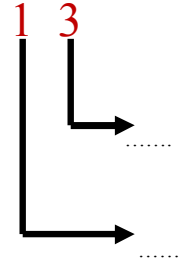
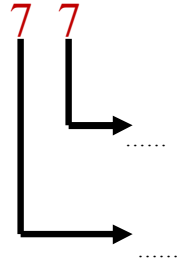
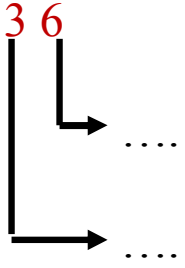
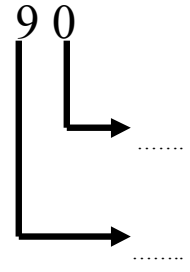
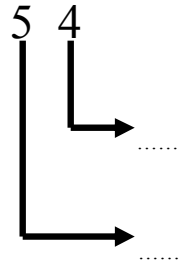
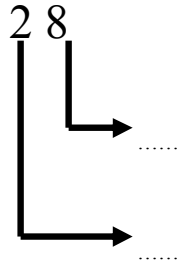
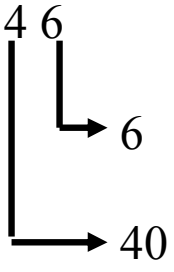
Onlar Bas. Birler Bas.



...50....

.....

Aşağıdaki doğal sayılardaki rakamların basamak değerlerini örnekteki gibi yazınız.



Aşağıda verilen ifadeleri dikkatlice okuyarak istenen sayıyı yazalım.

2 onluk, 7 birlik ten oluşan sayı kaçtır?	Sayı.....	Okunuşu:.....
5 onluk, 5 birlikten oluşan sayı kaçtır?	Sayı.....	Okunuşu:.....
7 onluk, 0 birlikten oluşan sayı kaçtır?	Sayı.....	Okunuşu:.....
4 birlik, 6 onluktan oluşan sayı kaçtır?	Sayı.....	Okunuşu:.....
8 birlik, 0 onluktan oluşan sayı kaçtır?	Sayı.....	Okunuşu:.....
5 onluk, 3 birlikten oluşan sayı kaçtır?	Sayı.....	Okunuşu:.....
6 birlik, 3 onluktan oluşan sayı kaçtır?	Sayı.....	Okunuşu:.....
0 birlik, 4 onluktan oluşan sayı kaçtır?	Sayı.....	Okunuşu:.....
7 onluk, 3 birlikten oluşan sayı kaçtır?	Sayı.....	Okunuşu:.....
8 onluk, 4 birlikten oluşan sayı kaçtır?	Sayı.....	Okunuşu:.....
6 birlik, 3 onluktan oluşan sayı kaçtır	Sayı.....	Okunuşu:.....
4 onluk, 9 birlikten oluşan sayı kaçtır?	Sayı.....	Okunuşu:.....
7 birlik, 6 onluktan oluşan sayı kaçtır	Sayı.....	Okunuşu:.....
1 birlik, 3 onluktan oluşan sayı kaçtır	Sayı.....	Okunuşu:.....

Aşağıda verilen sayılarını okunuşlarınızı yazalım:

Sayı	Okunuşu	Okunuşu	Sayı
54	→ Elli dört	Yetmiş beş →	75
29	→	Seksen dört →	
85	Altmış üç	
36	Kırk sekiz	
87	Otuz dokuz	
96	Yüz	
98	Seksen iki	
21	Elli beş	
33	Yirmi dokuz	
91	Otuz altı	
74	Altmış altı	
63	Doksan dokuz	
82	Elli yedi	